


# ΕΠΑΝΑΛΗΨΗ ΣΤΑ ΚΛΑΣΜΑΤΑ

Όνομα: \_\_\_\_\_ Ημερομηνία: \_\_\_\_\_

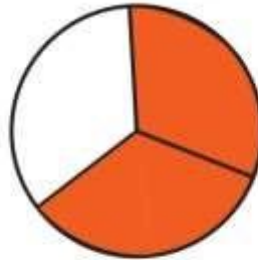
1. Γράφω το κλάσμα που παρουσιάζει το σκιασμένο μέρος κάθε επιφάνειας.



$$\frac{2}{5}$$



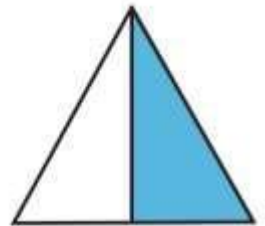
$$\frac{\quad}{\quad}$$



$$\frac{\quad}{\quad}$$



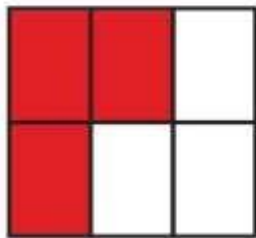
$$\frac{\quad}{\quad}$$



$$\frac{\quad}{\quad}$$




$$\frac{\quad}{\quad}$$



$$\frac{\quad}{\quad}$$



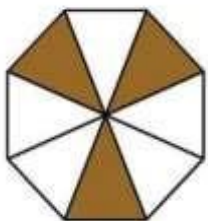
$$\frac{\quad}{\quad}$$



$$\frac{\quad}{\quad}$$




$$\frac{\quad}{\quad}$$



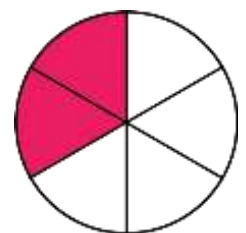
$$\frac{\quad}{\quad}$$



$$\frac{\quad}{\quad}$$

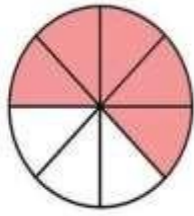


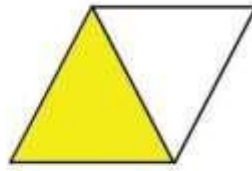
$$\frac{\quad}{\quad}$$

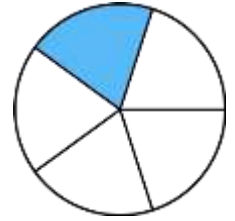



$$\frac{\quad}{\quad}$$



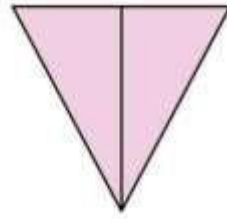


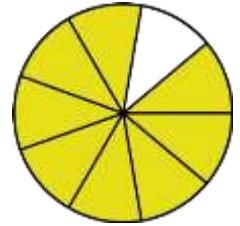





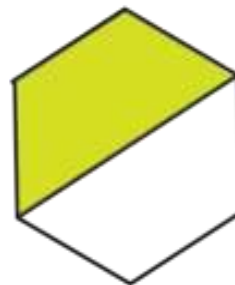


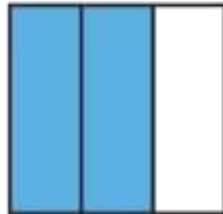
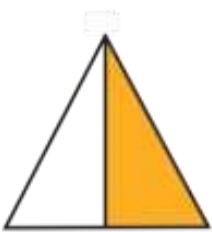








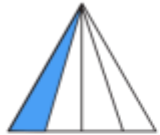


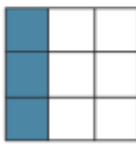




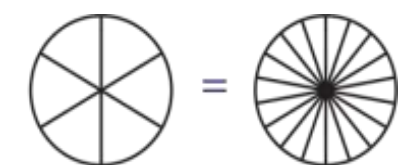
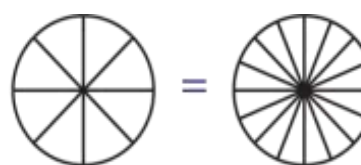
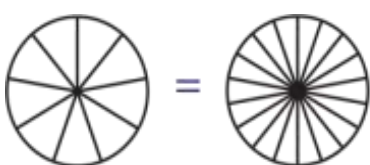
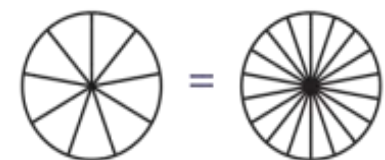
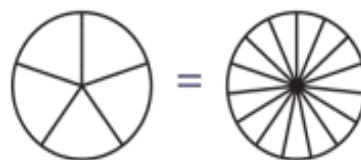
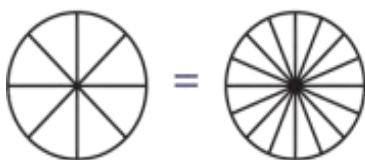
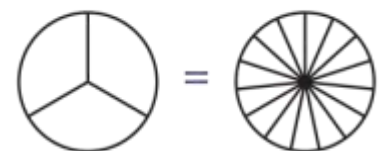
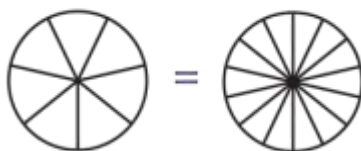
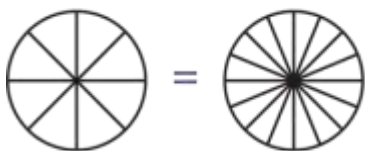

2. Αντιστοιχίζω τα ισοδύναμα κλάσματα:







3. Γράφω το κλάσμα που παρουσιάζει το σκιασμένο μέρος κάθε επιφάνειας με δύο τρόπους, όπου είναι δυνατόν.

 ----- ----- -----	 ----- ----- -----
 ----- -----	 ----- -----
 ----- -----	 ----- ----- -----
 ----- -----	 ----- ----- -----

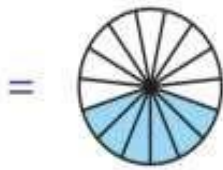
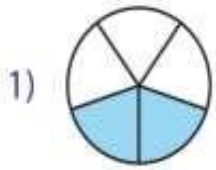
4. Φτιάχνω ισοδύναμα κλάσματα:



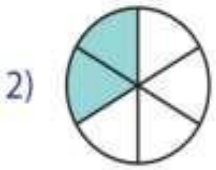
### 5. Γράφω τα ισοδύναμα κλάσματα.



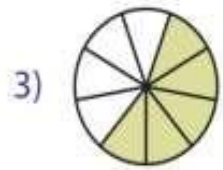
6. Γράφω τα ισοδύναμα κλάσματα.



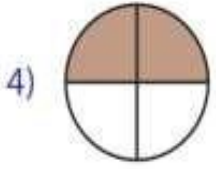
$$\frac{2}{5} = \frac{6}{15}$$



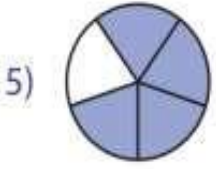
$$\frac{\square}{\square} = \frac{\square}{\square}$$



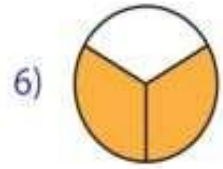
$$\frac{\square}{\square} = \frac{\square}{\square}$$



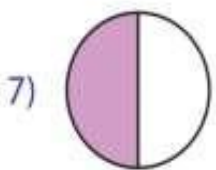
$$\frac{\square}{\square} = \frac{\square}{\square}$$



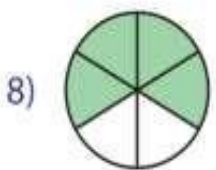
$$\frac{\square}{\square} = \frac{\square}{\square}$$



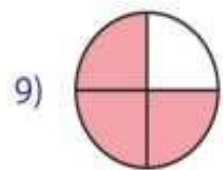
$$\frac{\square}{\square} = \frac{\square}{\square}$$



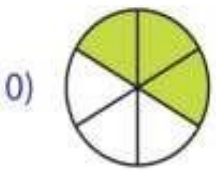
$$\frac{\square}{\square} = \frac{\square}{\square}$$



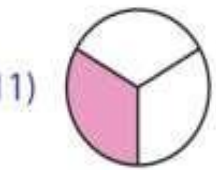
$$\frac{\square}{\square} = \frac{\square}{\square}$$



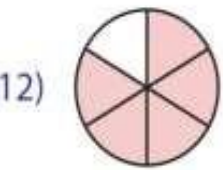
$$\frac{\square}{\square} = \frac{\square}{\square}$$



$$\frac{\square}{\square} = \frac{\square}{\square}$$



$$\frac{\square}{\square} = \frac{\square}{\square}$$



$$\frac{\square}{\square} = \frac{\square}{\square}$$

7. Να συμπληρώσεις, χρησιμοποιώντας τα σύμβολα = , < , > .

